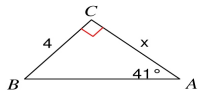
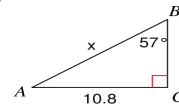


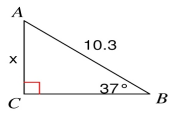
13)



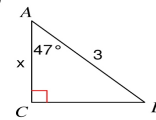
14)



15)

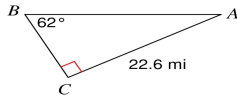


16)

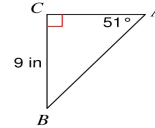


Solve each triangle. Round answers to the nearest tenth.

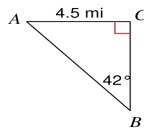
17)



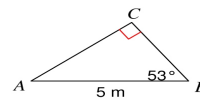
18)



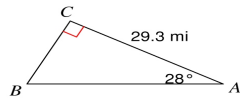
19)



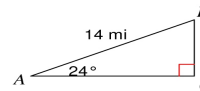
20)



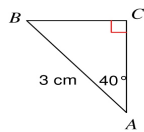
21)



22)



23)



24)

