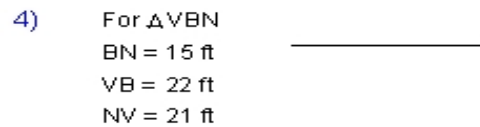
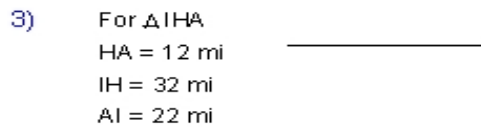
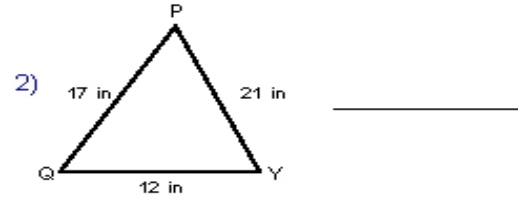
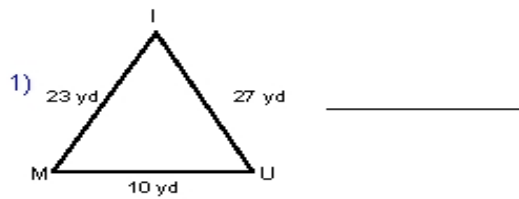


Name : _____ Score : _____

Teacher : _____ Date : _____

Triangle Inequality of Angles

Order each triangle's angles from largest to smallest.



Name the largest and smallest angle for each triangle.

