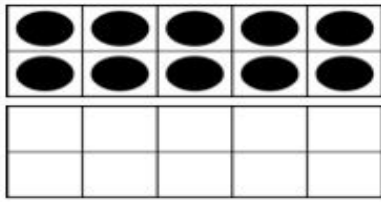
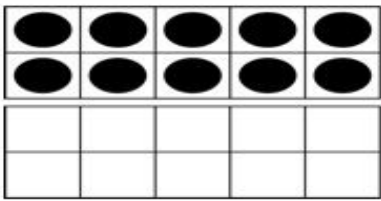



Name: \_\_\_\_\_

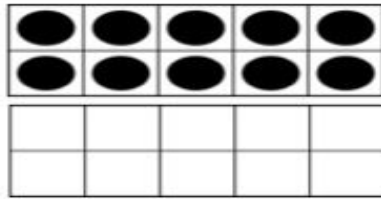


10+ \_\_\_\_\_ = \_\_\_\_\_

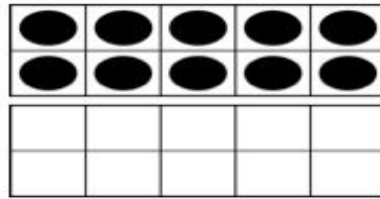
Spin the spinner. Add that number to 10. Fill in the ten's frame and write the equation to match your number.



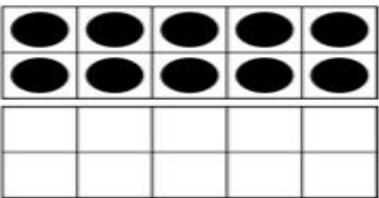
10+ \_\_\_\_\_ = \_\_\_\_\_



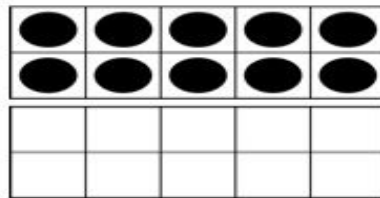
10+ \_\_\_\_\_ = \_\_\_\_\_



10+ \_\_\_\_\_ = \_\_\_\_\_



10+ \_\_\_\_\_ = \_\_\_\_\_



10+ \_\_\_\_\_ = \_\_\_\_\_