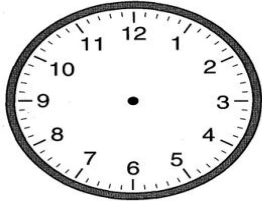


Name: _____

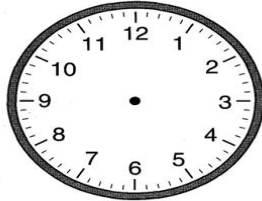
CCSS 2.MD.7 Tell and write time from analog and digital clocks to the nearest....

Telling Time to Quarter Hour

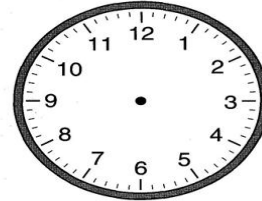
Directions: Draw in the minute and hour hands to match the digital time.



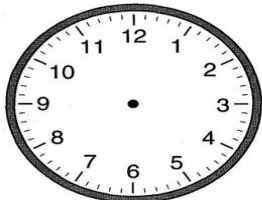
7:15



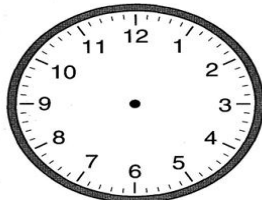
7:45




4:45



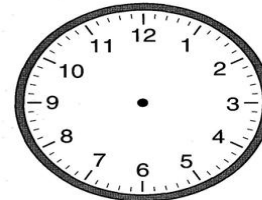
1:15



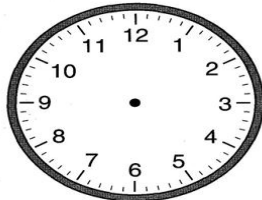
10:45




6:15



12:45



5:15



3:15