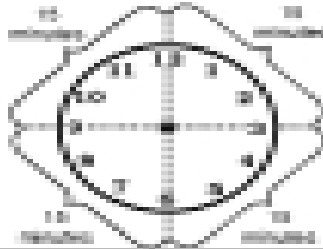



Telling Time to Quarter Past or Quarter 'Til the Hour

An hour is made up of four quarters. Each quarter is 15 minutes.




When the time is 15 minutes past the hour, it can be read as 2:15 or quarter past 2.



2:15 or a quarter past 2

When the time is 15 minutes until the next hour, the time can be read as 2:45 or a quarter 'til 3.



2:45 or a quarter 'til 3

Directions: Read the time on each clock. Circle whether the clock shows a quarter past or a quarter 'til.

1.



a quarter past 9
a quarter 'til 9

2.



a quarter past 9
a quarter 'til 9

3.



a quarter past 12
a quarter 'til 12

4.



a quarter past 1
a quarter 'til 1

5.



a quarter past 4
a quarter 'til 4

6.



a quarter past 7
a quarter 'til 7

Directions: Rewrite each time using a quarter past or a quarter 'til. The first one has already been done for you.

7. 2:45 _____ a quarter 'til three

86. 11:45 _____

8. 5:15 _____

87. 6:45 _____

9. 8:15 _____

88. 10:15 _____