



## What time is it?


Exercise 1: Write the time shown below each clock.



1. Quarter past 3




2.




3.



4.



5.



6.

Exercise 2: Write the digital times for each.

1. Quarter past 8 \_\_\_\_\_ 8:15
2. Five past 9 \_\_\_\_\_
3. Ten to 4 \_\_\_\_\_
4. Twenty five to 7 \_\_\_\_\_
5. Twenty past 3 \_\_\_\_\_
6. Half past 5 \_\_\_\_\_
7. Quarter to 8 \_\_\_\_\_
8. Twenty to 12 \_\_\_\_\_
9. Ten past 10 \_\_\_\_\_
10. Five to 10 \_\_\_\_\_