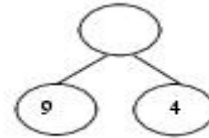
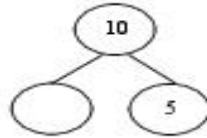
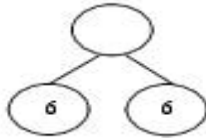
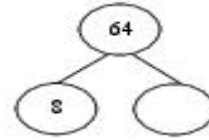
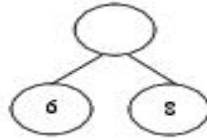
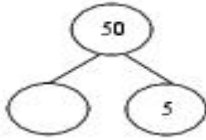


Name: \_\_\_\_\_

3<sup>rd</sup> Grade  
Monday

**Math Practice: Fluently Multiply and Divide within 100 (3.OA.7)**

Complete the number bonds.



Find each product by making an array.

$$\begin{array}{r} 7 \\ \times 8 \\ \hline \end{array}$$

$$\begin{array}{r} 9 \\ \times 6 \\ \hline \end{array}$$

$$\begin{array}{r} 4 \\ \times 4 \\ \hline \end{array}$$

Complete the fact family table.

<b>8, 48, 6</b>	___ × ___ = ___	___ × ___ = ___	___ + ___ = ___	___ + ___ = ___
<b>30, 5, 6</b>	___ × ___ = ___	___ × ___ = ___	___ + ___ = ___	___ + ___ = ___
<b>9, 6, 54</b>	___ × ___ = ___	___ × ___ = ___	___ + ___ = ___	___ + ___ = ___

Solve.

$$\begin{array}{r} 7 \\ \times 8 \\ \hline \end{array}$$

$$\begin{array}{r} 9 \\ \times 6 \\ \hline \end{array}$$

$$\begin{array}{r} 4 \\ \times 8 \\ \hline \end{array}$$

$$\begin{array}{r} 2 \\ \times 6 \\ \hline \end{array}$$

$$\begin{array}{r} 7 \\ \times 6 \\ \hline \end{array}$$

$$\begin{array}{r} 9 \\ \times 1 \\ \hline \end{array}$$

$$\begin{array}{r} 8 \\ \times 0 \\ \hline \end{array}$$

$$\begin{array}{r} 5 \\ \times 3 \\ \hline \end{array}$$

$$\begin{array}{r} 55 + 11 = \underline{\quad} \\ 72 + 8 = \underline{\quad} \end{array}$$

$$\begin{array}{r} 24 + 2 = \underline{\quad} \\ 35 + 7 = \underline{\quad} \end{array}$$

$$\begin{array}{r} 81 + 9 = \underline{\quad} \\ 36 + 4 = \underline{\quad} \end{array}$$