



Name \_\_\_\_\_

# Counting


How many dots are in each frame? Count and write the answer.




= \_\_\_\_\_




= \_\_\_\_\_




= \_\_\_\_\_




= \_\_\_\_\_




= \_\_\_\_\_




= \_\_\_\_\_




= \_\_\_\_\_




= \_\_\_\_\_




= \_\_\_\_\_



= \_\_\_\_\_



= \_\_\_\_\_



= \_\_\_\_\_