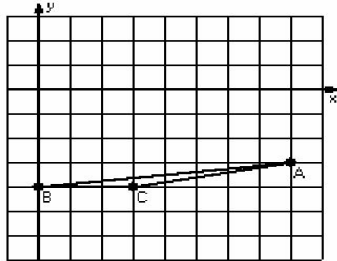


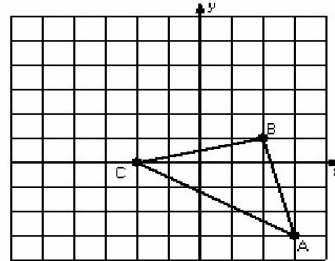
## Translations (A)

Instructions: Draw and label the translated image for each triangle.

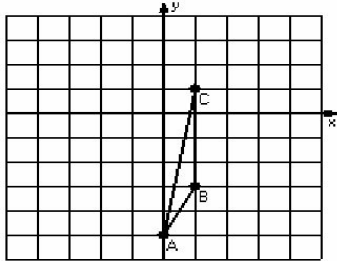
1) Translation  $(0,5)$



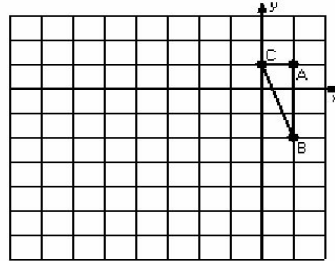
2) Translation  $(-2,0)$



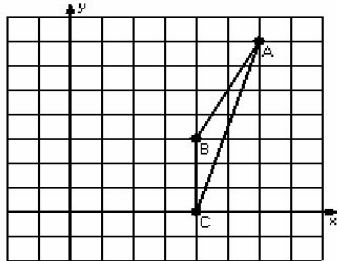
3) Translation  $(3,1)$



4) Translation  $(-5,-4)$



5) Translation  $(0,-1)$



6) Translation  $(4,5)$

