

Name : _____

Score : _____

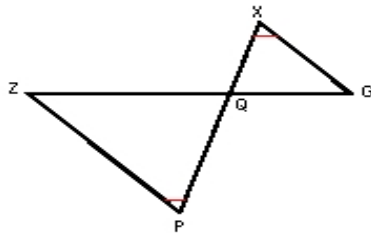
Teacher : _____

Date : _____

Similar Right Triangles

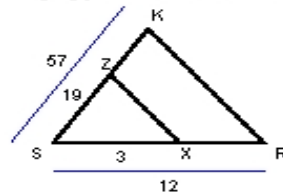
State if each triangle pair is similar. If so, state the similarity type and name the similar triangle.

1)



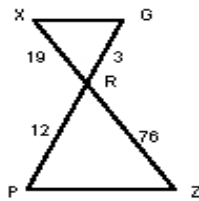
$\Delta GQX \sim$ _____

2)



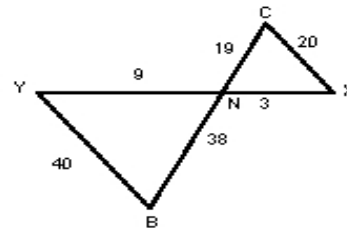
$\Delta RSK \sim$ _____

3)



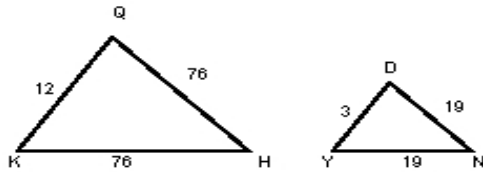
$\Delta GRX \sim$ _____

4)



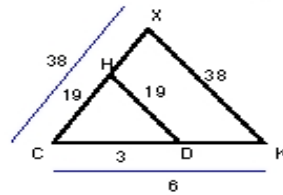
$\Delta XNC \sim$ _____

5)



$\Delta QKH \sim$ _____

6)



$\Delta KCX \sim$ _____

