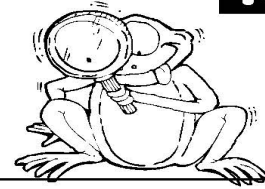


## Picture Patterns






Look at the first set of shapes. Think how the first shape changed to become the second one. Now look at the second set of shapes and see if you can find what the first shape should change into. Choose your answer from the shapes in the group on the right.

10



**Circle** the shape you think is the correct one.

1

$a$ 	=	$a$ 
$x$ 	=	$x$ 
		 $x$ 