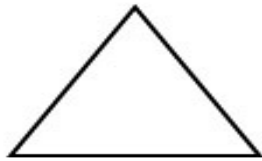




The perimeter of this square is _____



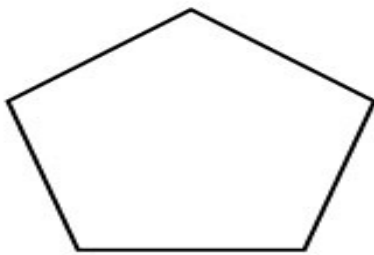
The perimeter of this rectangle is _____



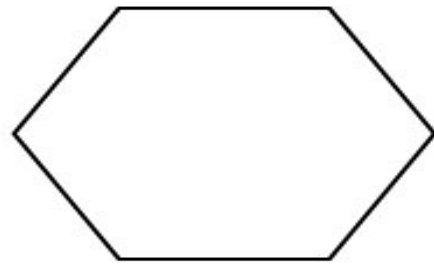
The perimeter of this triangle is _____



The perimeter of this parallelogram is _____



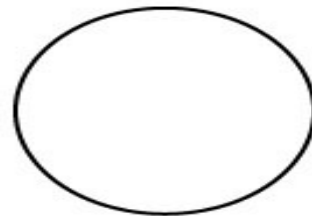
The perimeter of this pentagon is _____



The perimeter of this hexagon is _____



The perimeter of this star is _____



The perimeter of this circle is _____

www.benscoloringpages.com