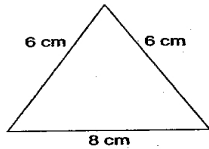
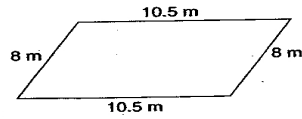


Polygon Perimeters

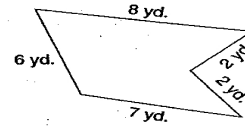
Find the perimeter (P) of a polygon that is not regular, add the lengths of its sides.



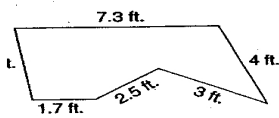
$$P = \underline{20 \text{ cm}}$$



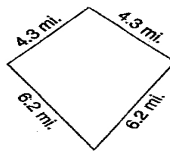
$$P = \underline{\hspace{2cm}}$$



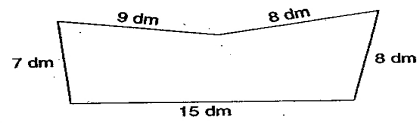
$$P = \underline{\hspace{2cm}}$$



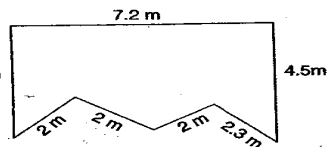
$$P = \underline{\hspace{2cm}}$$



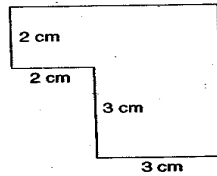
$$P = \underline{\hspace{2cm}}$$



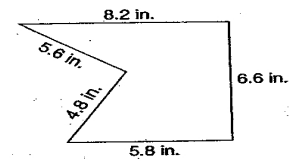
$$P = \underline{\hspace{2cm}}$$



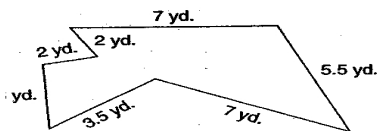
$$P = \underline{\hspace{2cm}}$$



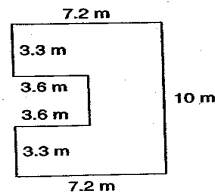
$$P = \underline{\hspace{2cm}}$$



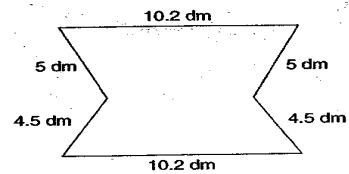
$$P = \underline{\hspace{2cm}}$$



$$P = \underline{\hspace{2cm}}$$



$$P = \underline{\hspace{2cm}}$$



$$P = \underline{\hspace{2cm}}$$