




Name _____ Date _____ # _____

Base Ten Addition and Subtraction 4.1

| | |
|---|--|
| <p>1. Using pictures, words, or numbers, explain how you will add the numbers chosen here.</p>  | <p>2. Using pictures, words, or numbers, explain how you will add the numbers chosen here.</p>  |
| <p>_____</p> | <p>_____</p> |
| <p>3. Using pictures, words, or numbers, explain how you will add the numbers chosen here.</p>  | <p>4. Using pictures, words, or numbers, explain how you will add the numbers chosen here.</p>  |
| <p>_____</p> | <p>_____</p> |