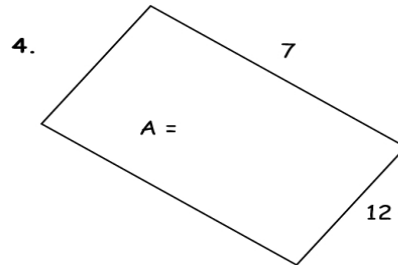
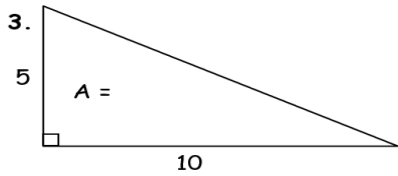
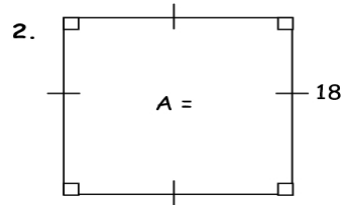
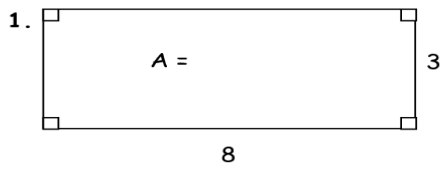


Finding Area Worksheet

Find the area of each figure below.



5. 7.5×14 rectangle.

$A =$

6. 4×9 right triangle

$A =$

7. Square with side length 9

$A =$

8. Rhombus with 4 right angles and side length 12

$A =$