

Name \_\_\_\_\_


Date \_\_\_\_\_

### Area of a Rectangle Version 1

Find the area of all the rectangles. Remember that when it comes to rectangle area, length times width equal area.



1. Area = \_\_\_\_\_




2. Area = \_\_\_\_\_



3. Area = \_\_\_\_\_



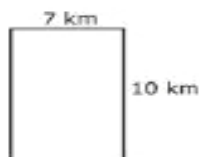
4. Area = \_\_\_\_\_



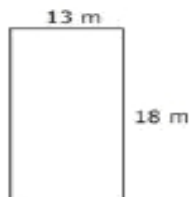
5. Area = \_\_\_\_\_



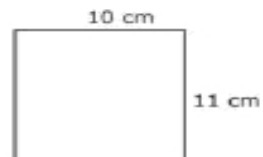
6. Area = \_\_\_\_\_



7. Area = \_\_\_\_\_



8. Area = \_\_\_\_\_



9. Area = \_\_\_\_\_