

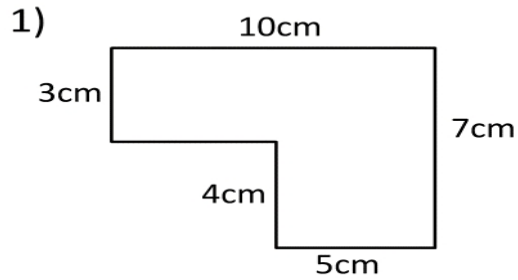
Name \_\_\_\_\_

Date \_\_\_\_\_



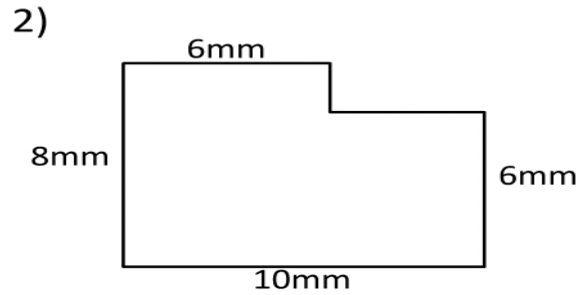
## AREA AND PERIMETER SHEET 4

Work out the area and perimeter of the following shapes by finding the missing sides. The shapes are not to scale.



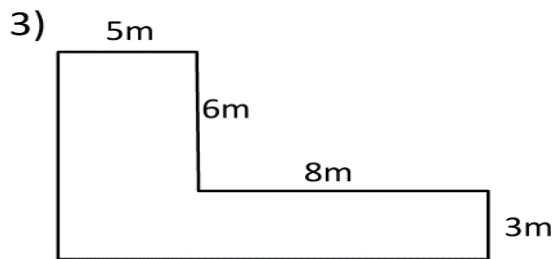
Area = \_\_\_\_\_ square cm ( $\text{cm}^2$ )

Perimeter = \_\_\_\_\_ m



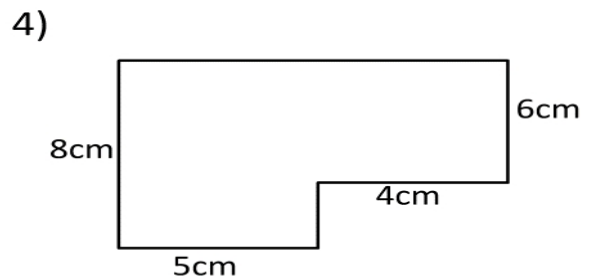
Area = \_\_\_\_\_ square mm ( $\text{mm}^2$ )

Perimeter = \_\_\_\_\_ mm



Area = \_\_\_\_\_ square m ( $\text{m}^2$ )

Perimeter = \_\_\_\_\_ m



Area = \_\_\_\_\_ square cm ( $\text{cm}^2$ )

Perimeter = \_\_\_\_\_ cm