


Name: _____

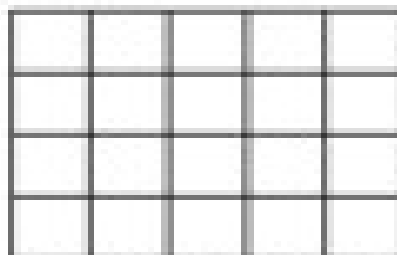
Finding Perimeter

Directions: Determine the perimeter of each shape by counting the blocks around the outside.




The perimeter of this shape is

_____ sq. cm.




The perimeter of this shape is

_____ sq. ft.



The perimeter of this shape is

_____ sq. in.



The perimeter of this shape is

_____ sq. ft.