





























Name: _____ Address: _____

In the Pond

How many are in the pond?

5  + 5  = _____	2  + 7  = _____
3  + 4  = _____	6  + 1  = _____
9  + 3  = _____	8  + 2  = _____
4  + 4  = _____	2  + 4  = _____
7  + 3  = _____	7  + 5  = _____
1  + 9  = _____	5  + 4  = _____
3  + 8  = _____	6  + 6  = _____