

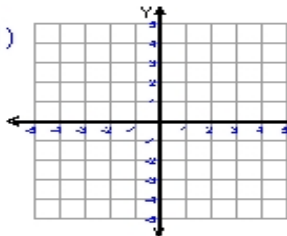
Name : \_\_\_\_\_

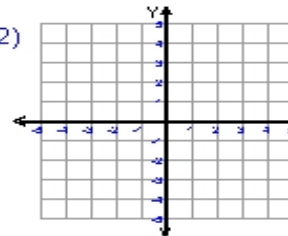
Score : \_\_\_\_\_

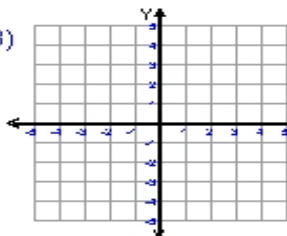
Teacher : \_\_\_\_\_

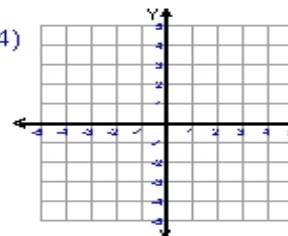
Date : \_\_\_\_\_

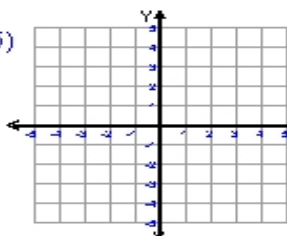
**Sketch and Write the Equation For Each Line**

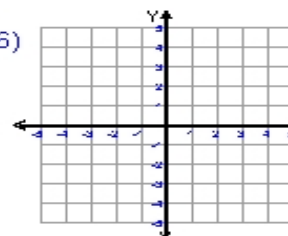
1)  equation \_\_\_\_\_  
ordered pair = (-1,3)  
slope (m) = \_\_\_\_\_  
y-intercept = - 3

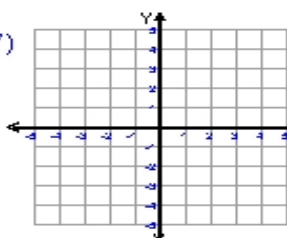
2)  equation \_\_\_\_\_  
ordered pair = (3,-4)  
slope (m) = \_\_\_\_\_  
y-intercept = - 2

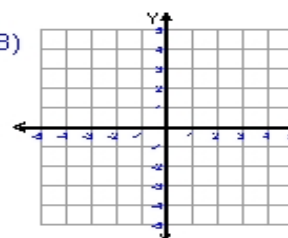
3)  equation \_\_\_\_\_  
ordered pair = (-4,-1)  
slope (m) = \_\_\_\_\_  
y-intercept = 3

4)  equation \_\_\_\_\_  
ordered pair = (-4,-3)  
slope (m) = \_\_\_\_\_  
y-intercept = 3

5)  equation \_\_\_\_\_  
ordered pair = (3,0)  
slope (m) = \_\_\_\_\_  
y-intercept = 3

6)  equation \_\_\_\_\_  
ordered pair = (3,-3)  
slope (m) = \_\_\_\_\_  
y-intercept = - 4

7)  equation \_\_\_\_\_  
ordered pair = (-4,2)  
slope (m) = \_\_\_\_\_  
y-intercept = 4

8)  equation \_\_\_\_\_  
ordered pair = (3,-3)  
slope (m) = \_\_\_\_\_  
y-intercept = 1

