








Name _____ Identifying simple machines

It's Simply Simple Machines!

Simple machines make work easier for us.
Look for examples of the simple machines labeled in the boxes.
Write the examples that you find.



<p>Lever</p> 	<p>Wheel And Axle</p> 
<p>Pulley</p> 	<p>Inclined Plane</p> 
<p>Wedge</p> 	<p>Screw</p> 

Bonus Box: On the back of this paper, draw an example of each of these simple machines you found all notes.