












### Bunches of Balls

Circle each set of tens.  
Count and write how many tens and ones.

<p>1. </p> <p>1 tens 5 ones 15</p>	<p>2. </p> <p>_____ tens _____ ones</p>	<p>3. </p> <p>_____ tens _____ ones</p>
<p>4. </p> <p>_____ tens _____ ones</p>		<p>5. </p> <p>_____ tens _____ ones</p>
<p>6. </p> <p>_____ tens _____ ones</p>	<p>7. </p> <p>_____ tens _____ ones</p>	<p>8. </p> <p>_____ tens _____ ones</p>
<p>9. </p> <p>_____ tens _____ ones</p>	<p>10. </p> <p>_____ tens _____ ones</p>	<p>_____ tens _____ ones</p>