


Name _____


Place Value

Directions: Write how many tens and ones for each number.




23

___ tens
___ ones



34

___ tens
___ ones




45

___ tens
___ ones




56

___ tens
___ ones



67

___ tens
___ ones



78

___ tens
___ ones