



Name \_\_\_\_\_

First, second and third grade 2012  
© CCL

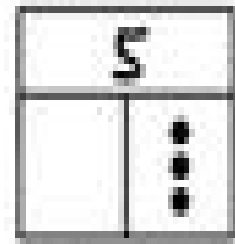
Draw dots to show the missing part. Write the addition sentence.




\_\_\_\_\_ + \_\_\_\_\_ = \_\_\_\_\_




\_\_\_\_\_ + \_\_\_\_\_ = \_\_\_\_\_




\_\_\_\_\_ + \_\_\_\_\_ = \_\_\_\_\_




\_\_\_\_\_ + \_\_\_\_\_ = \_\_\_\_\_



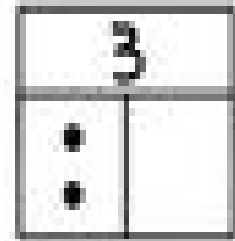
\_\_\_\_\_ + \_\_\_\_\_ = \_\_\_\_\_



\_\_\_\_\_ + \_\_\_\_\_ = \_\_\_\_\_



\_\_\_\_\_ + \_\_\_\_\_ = \_\_\_\_\_



\_\_\_\_\_ + \_\_\_\_\_ = \_\_\_\_\_