

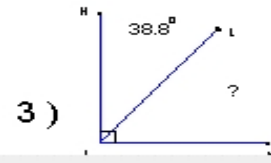
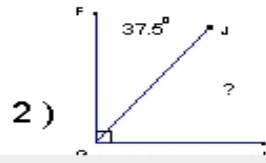
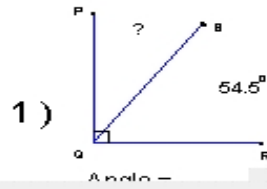
Name : _____

Score : _____

Teacher : _____

Date : _____

Find the missing angle measurement in each set of complementary angles.



How many hours do you work each day ? _____

There were a total of twenty-seven football games during the three month season, and

9) There were a total of _____ games played. Seven were played at home and _____ were played away.