



KNSTA.1


Name: \_\_\_\_\_

# Chilly Teen Numbers


Look at the ten frame and complete the statement.



12 is one group of 10 and \_\_\_\_\_ more.




15 is one group of 10 and \_\_\_\_\_ more.




17 is one group of 10 and \_\_\_\_\_ more.




11 is one group of 10 and \_\_\_\_\_ more.




13 is one group of 10 and \_\_\_\_\_ more.



19 is one group of 10 and \_\_\_\_\_ more.



18 is one group of 10 and \_\_\_\_\_ more.



14 is one group of 10 and \_\_\_\_\_ more.