





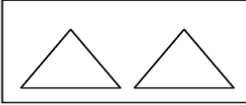
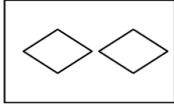
Kindergarten Math Diagnostic Test
Chets Creek Elementary

Administer the entire test to each child individually.
Follow each direction as it is written to ensure equality throughout the grade level.

1.  _____

Circle the shape that comes next in the pattern.  

2. 

Circle the two shapes that come next in the pattern.

3. Using pattern blocks make a three part pattern. Yes _____ No _____

4. Complete the number pattern.

10 20 _____ 40 50 _____ _____ 80