





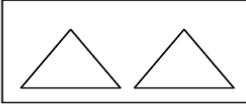
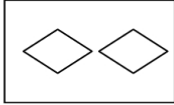
Kindergarten Math Diagnostic Test  
Chets Creek Elementary

Administer the entire test to each child individually.  
Follow each direction as it is written to ensure equality throughout the grade level.

1.  \_\_\_\_\_

Circle the shape that comes next in the pattern.  

2. 

Circle the two shapes that come next in the pattern.

3. Using pattern blocks make a three part pattern. Yes \_\_\_\_\_ No \_\_\_\_\_

4. Complete the number pattern.

10 20 \_\_\_\_\_ 40 50 \_\_\_\_\_ \_\_\_\_\_ 80