








Name \_\_\_\_\_

## Fractions on a Number Line

Represent fractions on a number line.

Put a dot on the number line to model the fraction.	
$\frac{2}{4}$	
$\frac{3}{4}$	
$\frac{2}{3}$	
$\frac{5}{10}$	

Write the fraction represented by the star on each number line.	
	
	
	
	

Copyright © 2011 Savvas Publishing Inc. - www.instantworksheets.net

