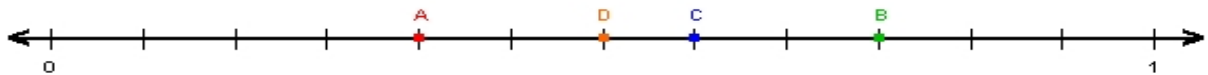


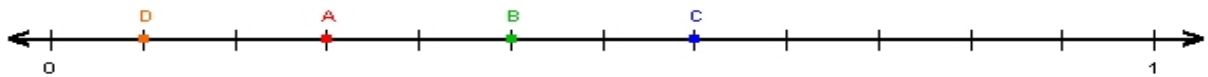
Name : _____ Score : _____

Teacher : _____ Date : _____

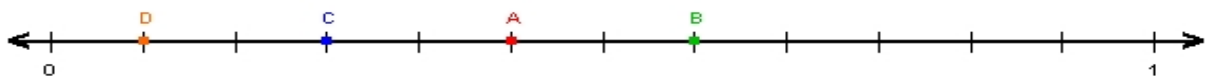
Fractions on Number Lines



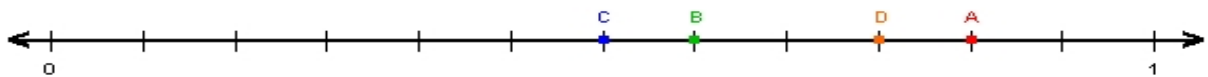
A = _____ B = _____ C = _____ D = _____



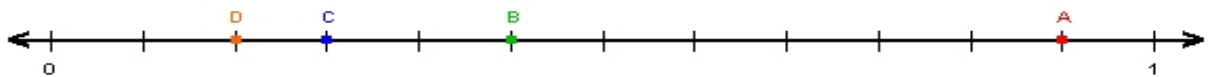
A = _____ B = _____ C = _____ D = _____



A = _____ B = _____ C = _____ D = _____



A = _____ B = _____ C = _____ D = _____



A = _____ B = _____ C = _____ D = _____