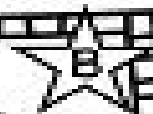



Name _____



part part WHOIE


Show 3 ways to make each number.

8




5 and 3

8




_____ and _____

8



_____ and _____

7




_____ and _____

7



_____ and _____

7



_____ and _____

This was:
(Circle one)

Easy

Just Right

Hard