

Name: _____ PREVIEW




X over the correct name.

	QUARTER
	NICKEL
	DIME
	QUARTER
	DIME
	PENNY
	PENNY
	QUARTER
	NICKEL

Estimate →

Do not count! About how many buttons do you think are in the jar?



Buttons

There are about _____ buttons in the jar.

Show 8

Show 12

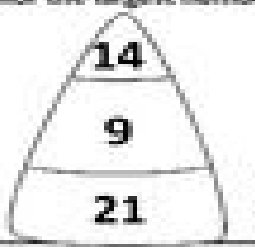
●	●	●		

Draw to Show →


Trace (6-10)



Color the largest number



Color the smallest number



Numbers Before and After



© 2010 HELIX MEDIA