

Name _____ Date _____ Number _____

MEASUREMENT UNIT 9 REVIEW

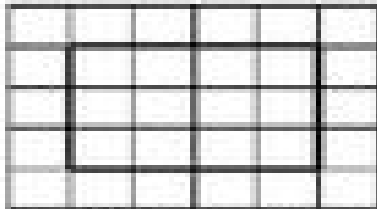
1. Measure the following lines in both inches and centimeters. Record your answers.

_____ inches _____ centimeters

_____ inches _____ centimeters


_____ inches _____ centimeters

2.



Perimeter: _____ cm

Area: _____ sq. cm



Perimeter: _____ cm

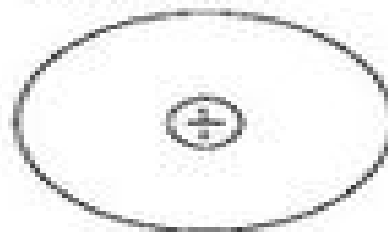
Area: _____ sq. cm

3. Measure the sides of the triangle to the nearest centimeter.



Perimeter = _____ cm

4. Complete the circle map with 3 other names for 1/2.



Created by Amanda Olson