








**180. Identify and count shapes** **Page 1**  
*(continued)* *(continued)*

Look carefully at some 2-D shapes and fill in the spaces in the table below:

Shape Name	Shape Picture	Number of straight faces	Number of rectangular faces (including squares)	Number of triangular faces	Number of circular faces
Cube		6	6	0	0
Cuboid					
Triangular prism					
Rectangular prism					
Cylindrical prism					
Square based pyramid					
Tetrahedron					
Octahedron	