


**1**

SOLVE FOR X:

$$|x + 4| = 5$$

**2**

SOLVE FOR X:

$$|2x - 3| = 13$$

**3**


SOLVE FOR X:

$$2|x| = 6$$

**4**


SOLVE FOR X:

$$|x + 4| + 1 = 7$$

**5**


SOLVE FOR X:

$$3|5x| = -15$$

**6**


SOLVE FOR X:

$$6|5x - 4| - 4 = 32$$

**7**

SOLVE FOR X:

$$7|4x - 2| + 3 = 24$$

**8**

SOLVE FOR X:

$$5|x| - 6 = -1$$

