

Name: _____

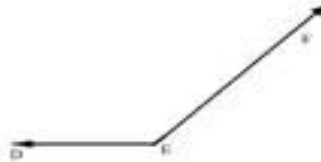
Monday

Math Practice: Measuring Angles (4.MD.6)
In Whole Number Degrees

Using a protractor, measure the angles.




$\angle ABC =$ _____



$\angle DEF =$ _____



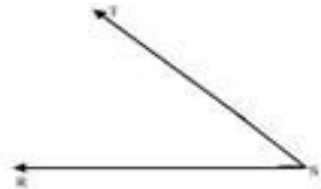
$\angle GHI =$ _____



$\angle IJK =$ _____



$\angle PQR =$ _____



$\angle RST =$ _____

Sketch each angle measurement using a protractor.

$\angle CDE = 45^\circ$

$\angle ABC = 135^\circ$