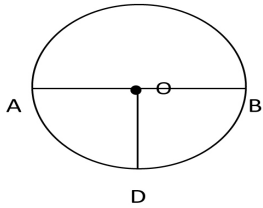


Student Name: _____

Score: _____

Basic Circle Worksheet

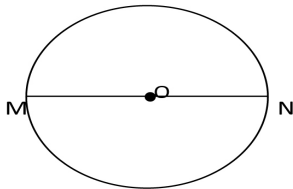
Identify center, radius and diameter of the given circles:



OD = _____

AB = _____

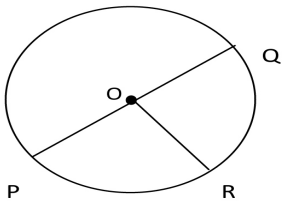
O = _____



Center = _____

Radius = _____ or _____

Diameter = _____



Center = _____

Radius = _____ or _____ or _____

Diameter = _____