

Name \_\_\_\_\_

Time: hour and half hour

### Small Surprises


Write the time below each clock.  
Use the answer box.



\_\_\_\_\_




\_\_\_\_\_



\_\_\_\_\_



\_\_\_\_\_




\_\_\_\_\_



\_\_\_\_\_




\_\_\_\_\_



\_\_\_\_\_



\_\_\_\_\_



\_\_\_\_\_



Answer Box		
2:00	3:30	5:30
6:00	4:00	8:00
7:30	1:30	11:00
	10:30	