






name: \_\_\_\_\_

date: \_\_\_\_\_

## Sweet Symmetry

find each shape by drawing the other side.



what does "symmetry" mean?

---

---

---