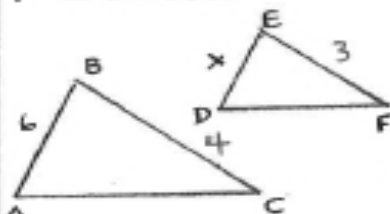

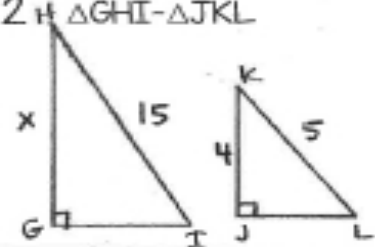

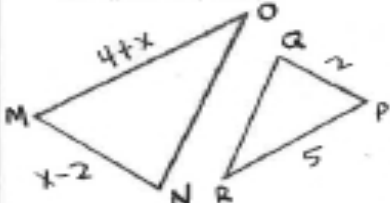

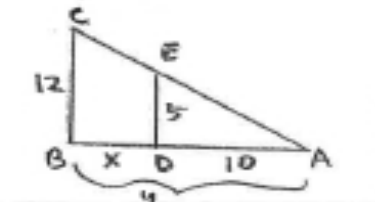

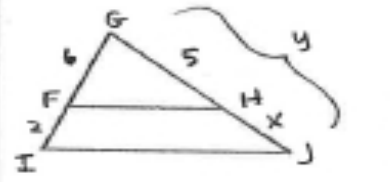

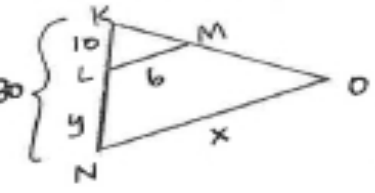

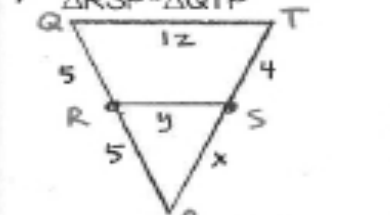

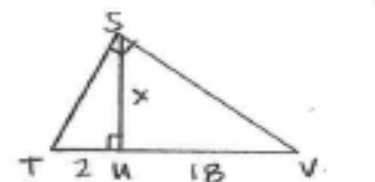



SIMILAR TRIANGLES WORKSHEET

<p>1 $\triangle ABC \sim \triangle DEF$</p>  <div style="text-align: right; margin-top: 10px;">  </div>	<p>2 $\triangle GHI \sim \triangle JKL$</p>  <div style="text-align: right; margin-top: 10px;">  </div>
<p>3 $\triangle MNO \sim \triangle PQR$</p>  <div style="text-align: right; margin-top: 10px;">  </div>	<p>4 $\triangle ABC \sim \triangle ADE$</p>  <div style="text-align: right; margin-top: 10px;">  </div>
<p>5 $\triangle FGH \sim \triangle IGT$</p>  <div style="text-align: right; margin-top: 10px;">  </div>	<p>6 $\triangle KLM \sim \triangle KNO$</p>  <div style="text-align: right; margin-top: 10px;">  </div>
<p>7 $\triangle RSP \sim \triangle QTP$</p>  <div style="text-align: right; margin-top: 10px;">  </div>	<p>8 $\triangle STU \sim \triangle VSU$</p>  <div style="text-align: right; margin-top: 10px;">  </div>