

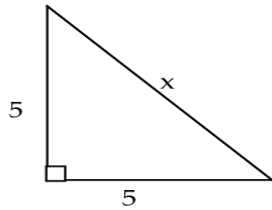
Vector Worksheet

Name _____

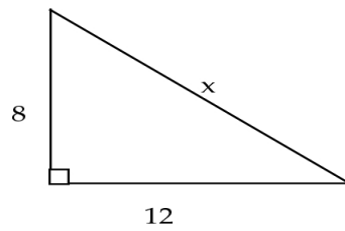
Period _____

Directions: Use the Pythagorean Theorem to solve for x .

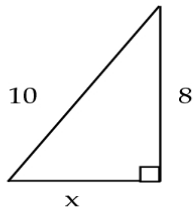
1.



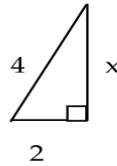
2.



3.

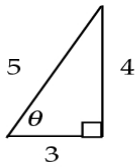


4.

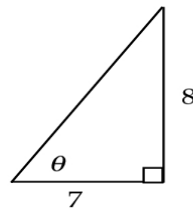


Directions: Find the sin, cos, and tan of the angle θ .

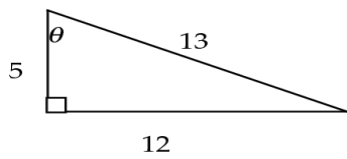
5.



6.



7.



8.

