







Name _____

Date _____



Making Sense of...SIGHT

There's more to these puzzles than meets the eye! Look at each optical illusion below, then answer the question and write your explanation for the illusion in the space provided.

<p>1.</p>  <p>Is circle A larger, smaller, or the same size as circle B? Explanation: _____ _____</p>	<p>2.</p>  <p>Is the white block at the top larger than the white block at the bottom? Explanation: _____ _____</p>
<p>3.</p>  <p>Which of the three horizontal lines is the longest: the top, the middle, or the bottom? Explanation: _____ _____</p>	<p>4.</p>  <p>Is the pointed arch continuous or broken? Explanation: _____ _____</p>
<p>5.</p>  <p>Are the vertical lines straight? _____ Do the crossbars go straight through them or is their pattern uneven? Explanation: _____ _____</p>	<p>6.</p>  <p>Are these circles resting on a straight or curved line? Explanation: _____ _____</p>

