













Name \_\_\_\_\_

Date \_\_\_\_\_

# Before & After Math

Fill in the blanks with the missing numbers.

 [ ] 72 [ ]	 [ ] 60 [ ]	 [ ] 9 [ ]
 [ ] 20 [ ]	 [ ] 89 [ ]	 [ ] 51 [ ]
 [ ] 17 [ ]	 [ ] 42 [ ]	 [ ] 36 [ ]
 [ ] 99 [ ]	 [ ] 29 [ ]	 [ ] 3 [ ]