

Measurement Mania: TIME TO REVIEW

How many inches is the pencil? _____




How many inches is the match? _____



How many centimeters is the feather? _____



Circle all the objects that weigh less than 1 pound.




Circle all the objects that weigh more than 1 pound.




Circle the correct answers.

How much is 1 quart?



4 pints



4 cups

How much is 1 liter?



about 1 gallon



about 1 quart