



Name _____

Bradley!


Directions: Circle the fraction that shows what part of each set is shaded.




$\frac{3}{5}$ $\frac{1}{5}$ $\frac{2}{5}$




$\frac{4}{5}$ $\frac{2}{5}$ $\frac{3}{5}$




$\frac{1}{4}$ $\frac{2}{4}$ $\frac{3}{4}$



$\frac{3}{6}$ $\frac{4}{6}$ $\frac{2}{6}$



$\frac{1}{4}$ $\frac{2}{4}$ $\frac{3}{4}$



$\frac{2}{3}$
 $\frac{3}{3}$ $\frac{1}{3}$

