

Name: \_\_\_\_\_


Name: \_\_\_\_\_

### Graphing Quadratic Functions


Date: \_\_\_\_\_ Period: \_\_\_\_\_

Sketch the graph of each function.


21.  $y = 5x^2$



22.  $y = -\frac{1}{2}x^2$



23.  $y = x^2 + 2x + 2$



24.  $y = 2x^2 - 8x + 8$

