

Score

	6
--	---

03-01-01-069-s

Name: _____

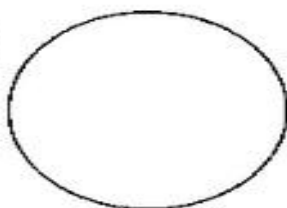
Subject: Year 3 Numeracy

Date: _____

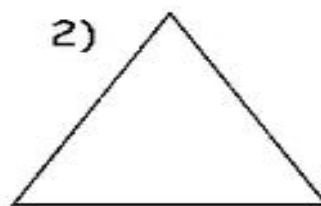
Unit: Fractions

Draw a line to divide these shapes in half. Colour one half blue and one half red:

1)



2)




3)



4)



5)



6)

