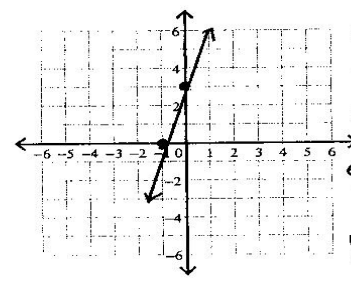


Name _____

Period _____

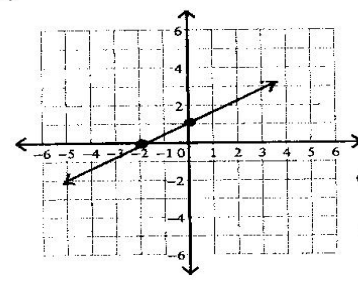
Graphing Lines

1)



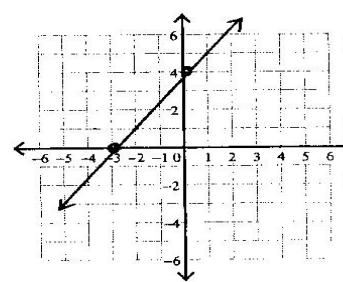
x int _____
y int _____
Slope _____
equation of the line _____
y = _____

2)



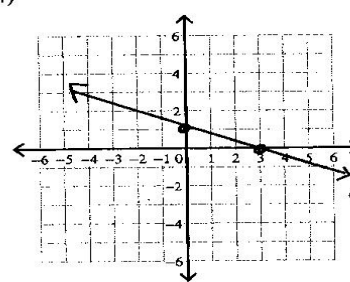
x int _____
y int _____
Slope _____
eq of the line _____
y = _____

3)



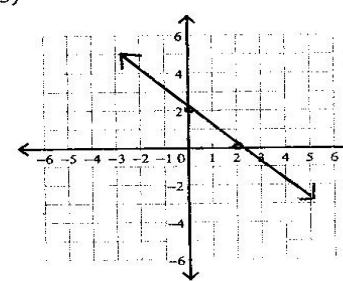
x int _____
y int _____
Slope _____
eq of the line _____
y = _____

4)



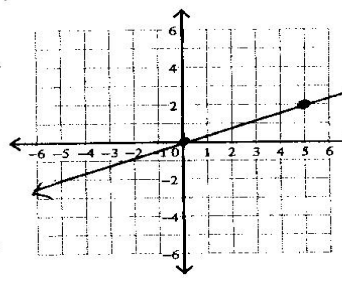
x int _____
y int _____
Slope _____
eq of the line _____
y = _____

5)



x int _____
y int _____
Slope _____
eq of the line _____
y = _____

6)



x int _____
y int _____
Slope _____
eq of the line _____
y = _____