


Name _____

Adding to 18—
doubles











Not Far From Home











Start at . Write the number of steps. Add.

steps to + steps home = _____ steps

steps to + steps home = _____ steps

		<u>7</u> + <u>7</u> = <u>14</u>
		_____ + _____ = _____
		_____ + _____ = _____
		_____ + _____ = _____

		_____ + _____ = _____
		_____ + _____ = _____
		_____ + _____ = _____
		_____ + _____ = _____