








# Tens and ones

How many tens and ones do you see?

tens	ones	tens	ones	tens	ones
					
1	4				
<input type="text" value="14"/>	<input type="text"/>	<input type="text"/>	<input type="text"/>	<input type="text"/>	<input type="text"/>

Draw the tens and ones.

tens	ones	tens	ones	tens	ones
1	9	1	5		3
<input type="text" value="19"/>	<input type="text"/>	<input type="text"/>	<input type="text"/>	<input type="text"/>	<input type="text"/>